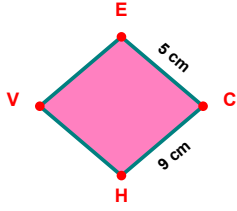
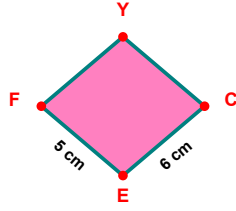


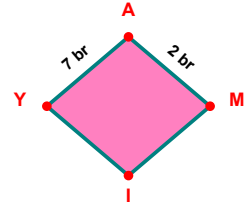
SORU: Aşağıdaki şekillerde verilen, kenar uzunlukları farklarını bulunuz.



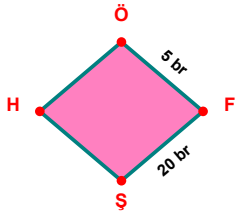
$$|CH| - |EC| = \dots\dots\dots$$



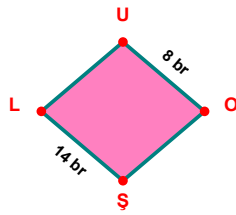
$$|CE| - |EF| = \dots\dots\dots$$



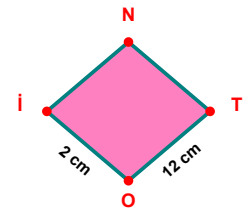
$$|YA| - |AM| = \dots\dots\dots$$



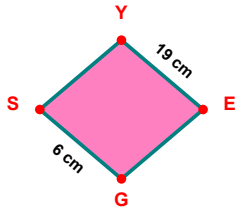
$$|FŞ| - |ÖF| = \dots\dots\dots$$



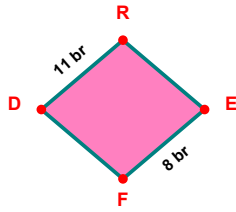
$$|ŞL| - |UO| = \dots\dots\dots$$



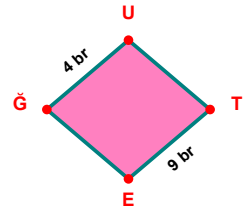
$$|TO| - |Oİ| = \dots\dots\dots$$



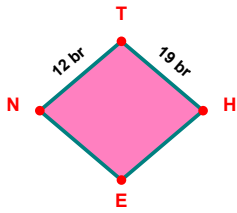
$$|YE| - |GS| = \dots\dots\dots$$



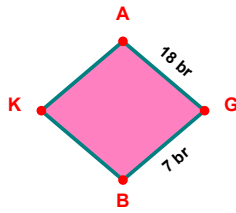
$$|DR| - |EF| = \dots\dots\dots$$



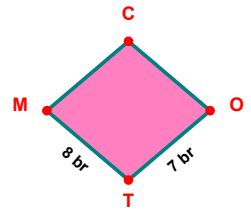
$$|TE| - |ĞU| = \dots\dots\dots$$



$$|TH| - |NT| = \dots\dots\dots$$

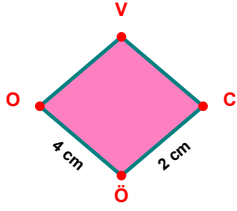


$$|AG| - |GB| = \dots\dots\dots$$

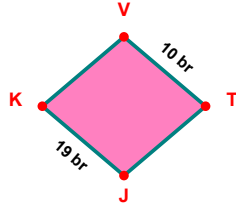


$$|TM| - |OT| = \dots\dots\dots$$

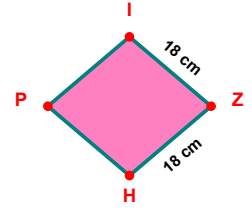
SORU: Aşağıdaki şekillerde verilen, kenar uzunlukları farklarını bulunuz.



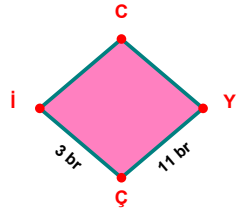
$$|ÖO| - |CÖ| = \dots\dots\dots$$



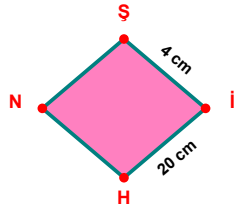
$$|JK| - |VT| = \dots\dots\dots$$



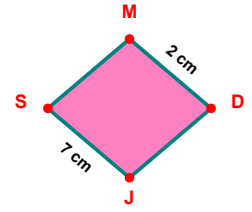
$$|ZH| - |IZ| = \dots\dots\dots$$



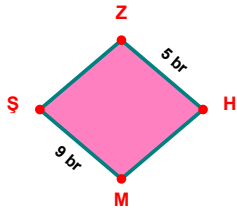
$$|YC| - |Çİ| = \dots\dots\dots$$



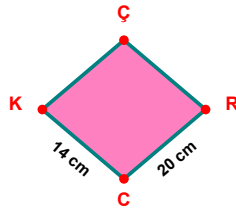
$$|İH| - |Şİ| = \dots\dots\dots$$



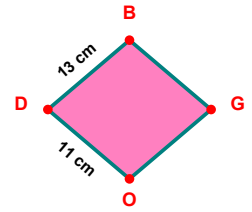
$$|JS| - |MD| = \dots\dots\dots$$



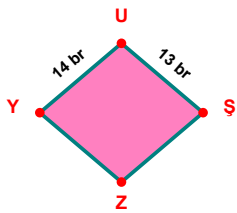
$$|MS| - |ZH| = \dots\dots\dots$$



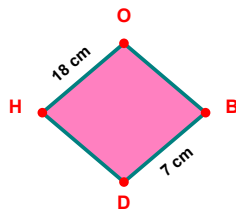
$$|RC| - |CK| = \dots\dots\dots$$



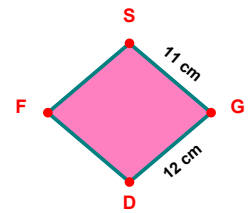
$$|DB| - |OD| = \dots\dots\dots$$



$$|YU| - |UŞ| = \dots\dots\dots$$



$$|HO| - |BD| = \dots\dots\dots$$



$$|GD| - |SG| = \dots\dots\dots$$

SÜREÇ ODAKLI DEĞERLENDİRME ÖLÇEĞİ

Doğru Sayısı: / 24

Öğretmen ilgili kutucuğu işaretler.

Geliştirilmeli (0-8)

İyi (9-14)

Çok İyi (15-20)

Mükemmel (21-24)

☐☐☐☐

Hazırlayan:

Bu bölüme sınıfınızın ilgili kazanıma yönelik genel durumuna ilişkin gözlem ve izlenimlerinizi, öğrencilerinizin bu kazanımla ilgili öğrenme eksikliklerini ve bu eksikliklerin giderilmesi amacıyla yaptığınız/yapmayı planladığınız faaliyetleri not edebilirsiniz.

No	Adı - Soyadı	Toplam Puan	Değerlendirme
1			
2			
3			
4			
5			
6			
7			
8			
9			
10			
11			
12			
13			
14			
15			
16			
17			
18			
19			
20			
21			
22			
23			
24			
25			
26			
27			
28			
29			
30			
31			
32			
33			
34			
35			

Hazırlayan: